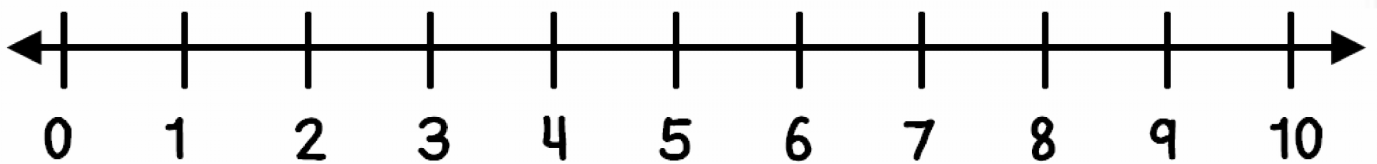


Problem of the Day

Sam had 10 books in his bag. He gave 4 away. How many books does Sam have left?

Preview



Sam has _____ books left.

- Picture
- Number Sentence
- Answer Sentence
- Correct Answer

I did it!

Problem of the Day

The table below shows how many books each first grade class read. How many books did they read in all?

Books Read in First Grade	
Class	# of Books Read
Mr. R	10
Mrs. F	10
Mr. A	10
Mrs. D	10

Draw a model

Preview

_____ tens ○ _____

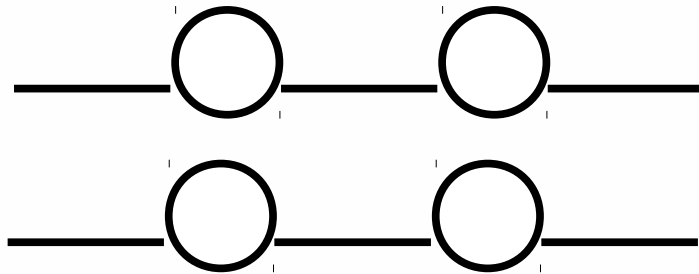
They read _____ books in all.

<input type="checkbox"/> Picture	I did it!
<input type="checkbox"/> Number Sentence	
<input type="checkbox"/> Answer Sentence	
<input type="checkbox"/> Correct Answer	

Problem of the Day

Lucky the leprechaun made off with 7 shamrocks from a trap. He put them into two pots. Show two different ways he could split them between two pots.

Preview



He could put _____ in one pot and _____ in another or

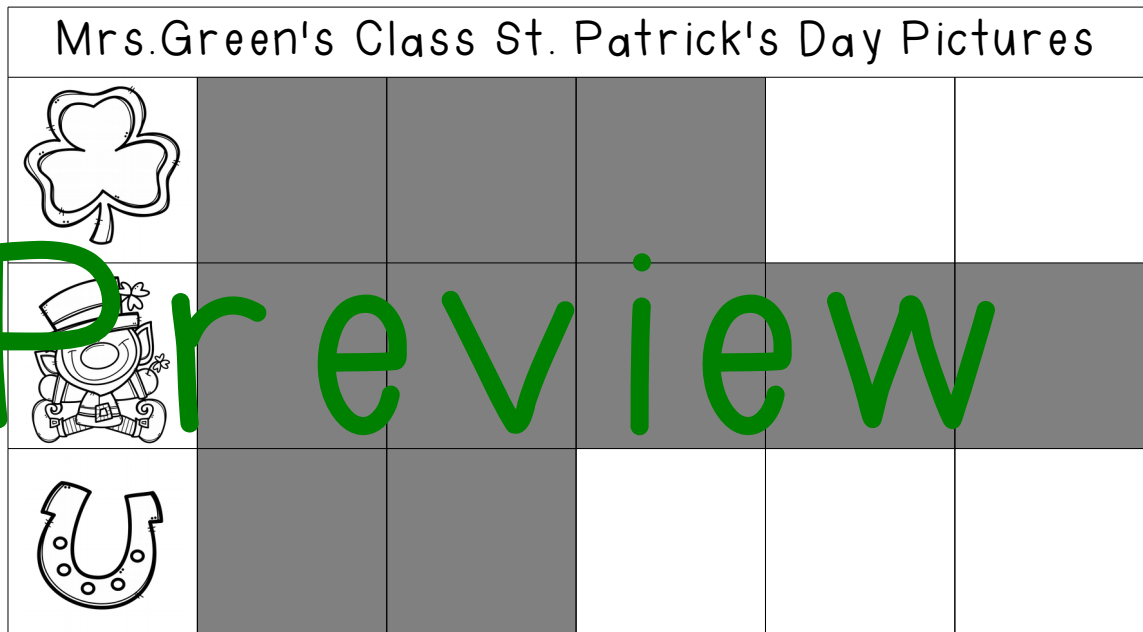
he could put _____ in one pot and _____ in another

- | | |
|--------------------------|-----------------|
| <input type="checkbox"/> | Picture |
| <input type="checkbox"/> | Number Sentence |
| <input type="checkbox"/> | Answer Sentence |
| <input type="checkbox"/> | Correct Answer |

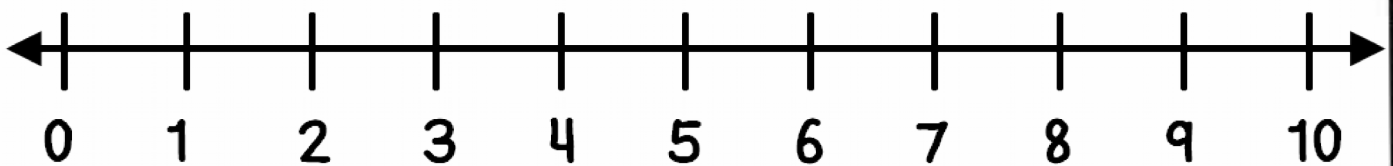
I did it!

Problem of the Day

The graph below shows what students in Mrs. Green's class drew on their St. Patrick's Day pictures. How many fewer people drew shamrocks than leprechauns?



Preview



_____ fewer people drew shamrocks.

<input type="checkbox"/>	Picture	I did it!
<input type="checkbox"/>	Number Sentence	
<input type="checkbox"/>	Answer Sentence	
<input type="checkbox"/>	Correct Answer	